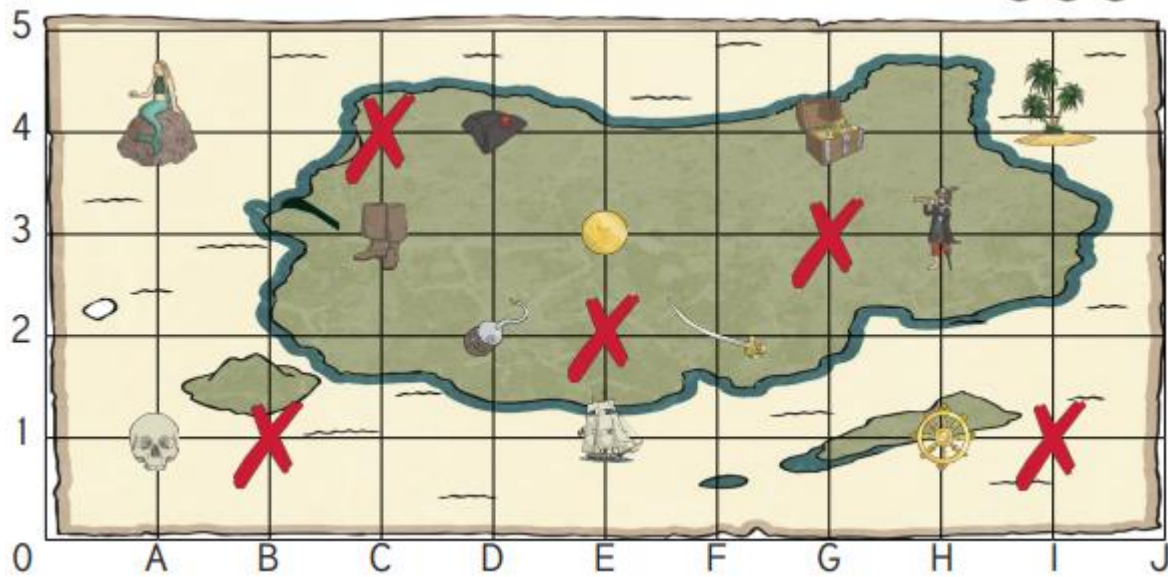







Pirate Map Coordinates



What is at these coordinates on the pirate map?	
(I,4) =	<u>palm trees</u>
(A,1) =	<u>skull</u>
(E,3) =	<u>gold coin</u>
(F,2) =	<u>sword</u>
(G,4) =	<u>treasure</u>

Write the coordinate of these places on the pirate map:	
 =	(C , 3)
 =	(H , 3)
 =	(E , 1)
 =	(H , 1)
 =	(D , 4)

Plot these coordinates on the grid using a cross.	
	(B,1)
	(C,4)
	(E,2)
	(I,1)
	(G,3)